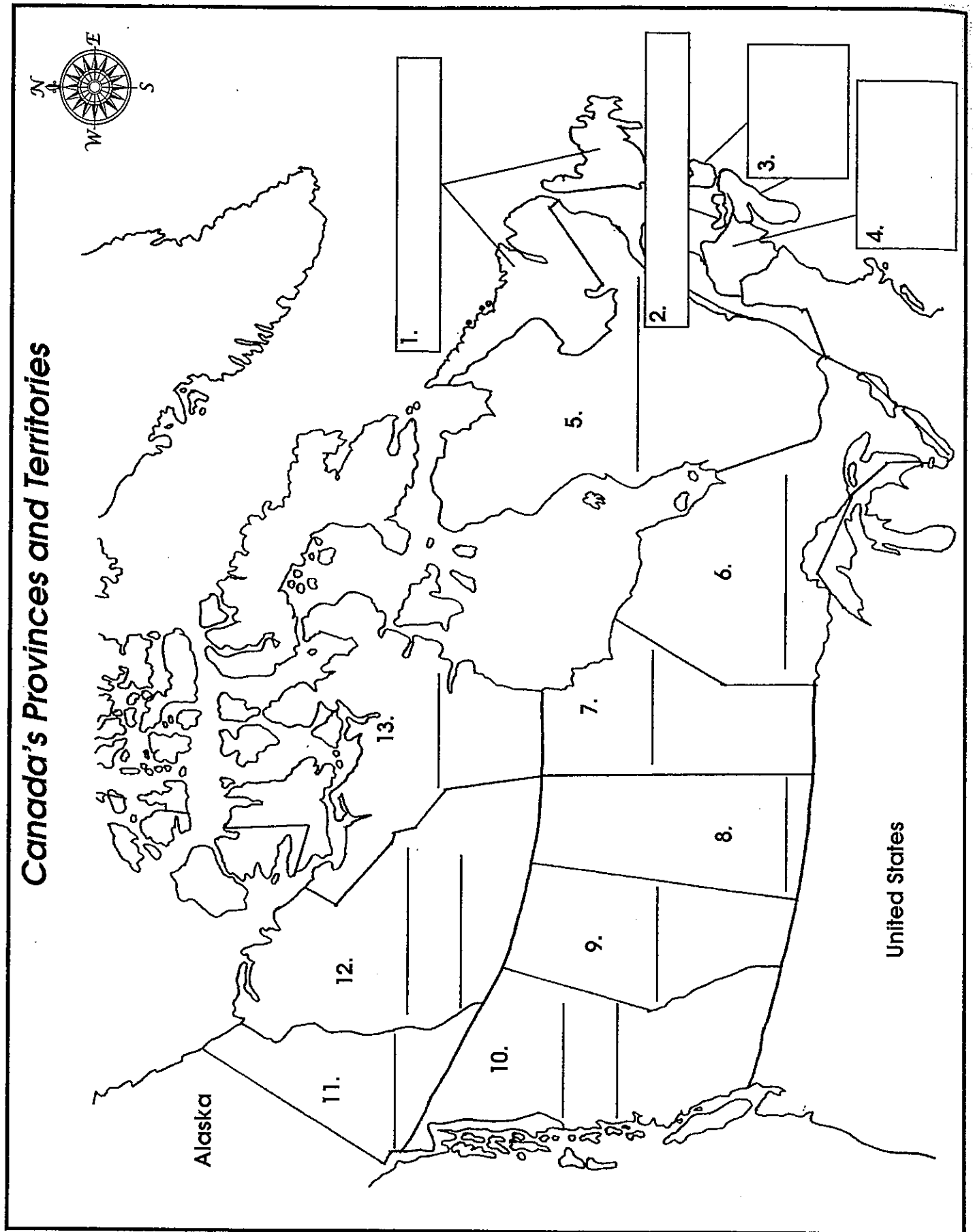


Our Provinces, Territories, and Capital Cities

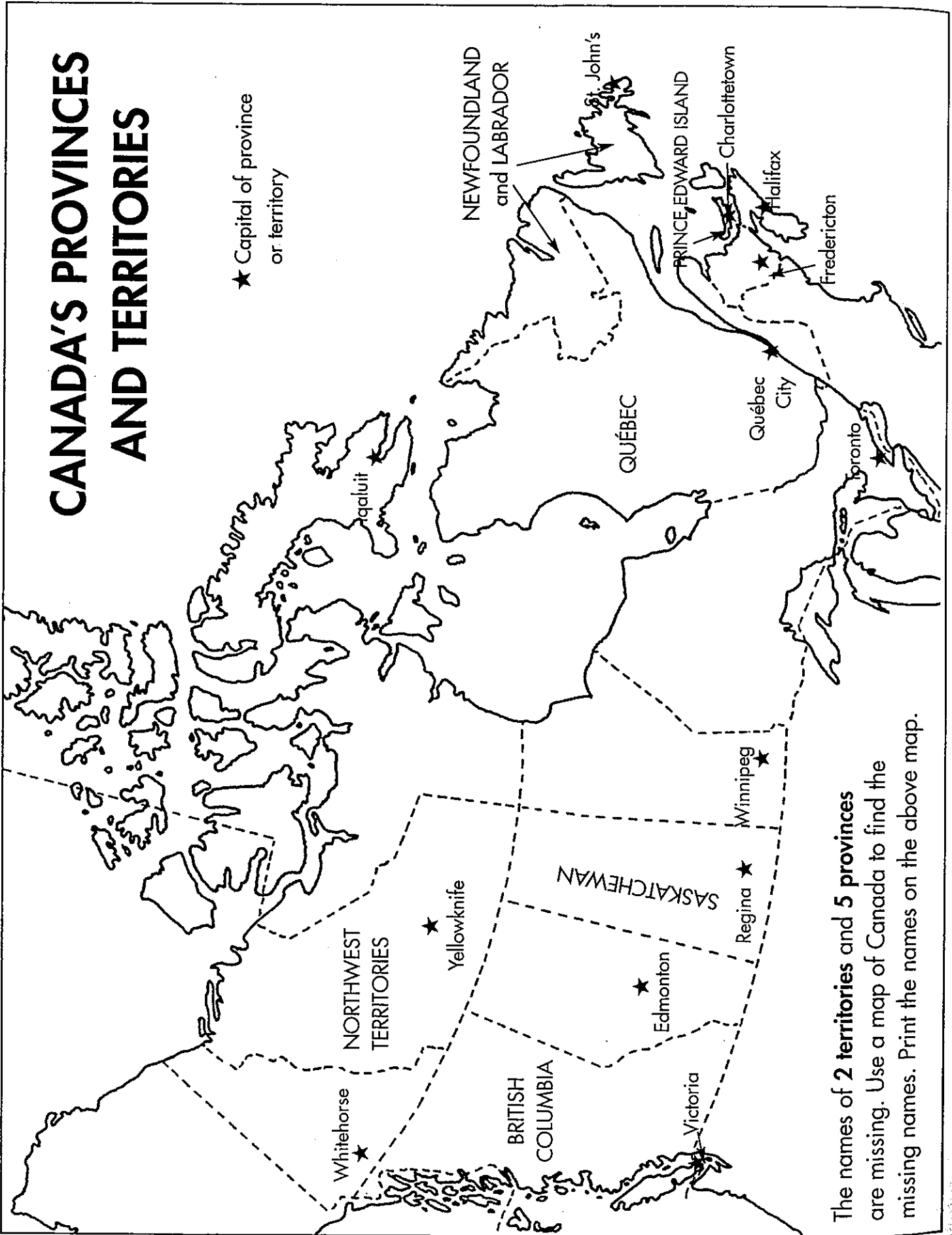


Name: _____



CANADA'S PROVINCES AND TERRITORIES

★ Capital of province or territory



The names of 2 territories and 5 provinces are missing. Use a map of Canada to find the missing names. Print the names on the above map.

CANADA'S PROVINCES & TERRITORIES

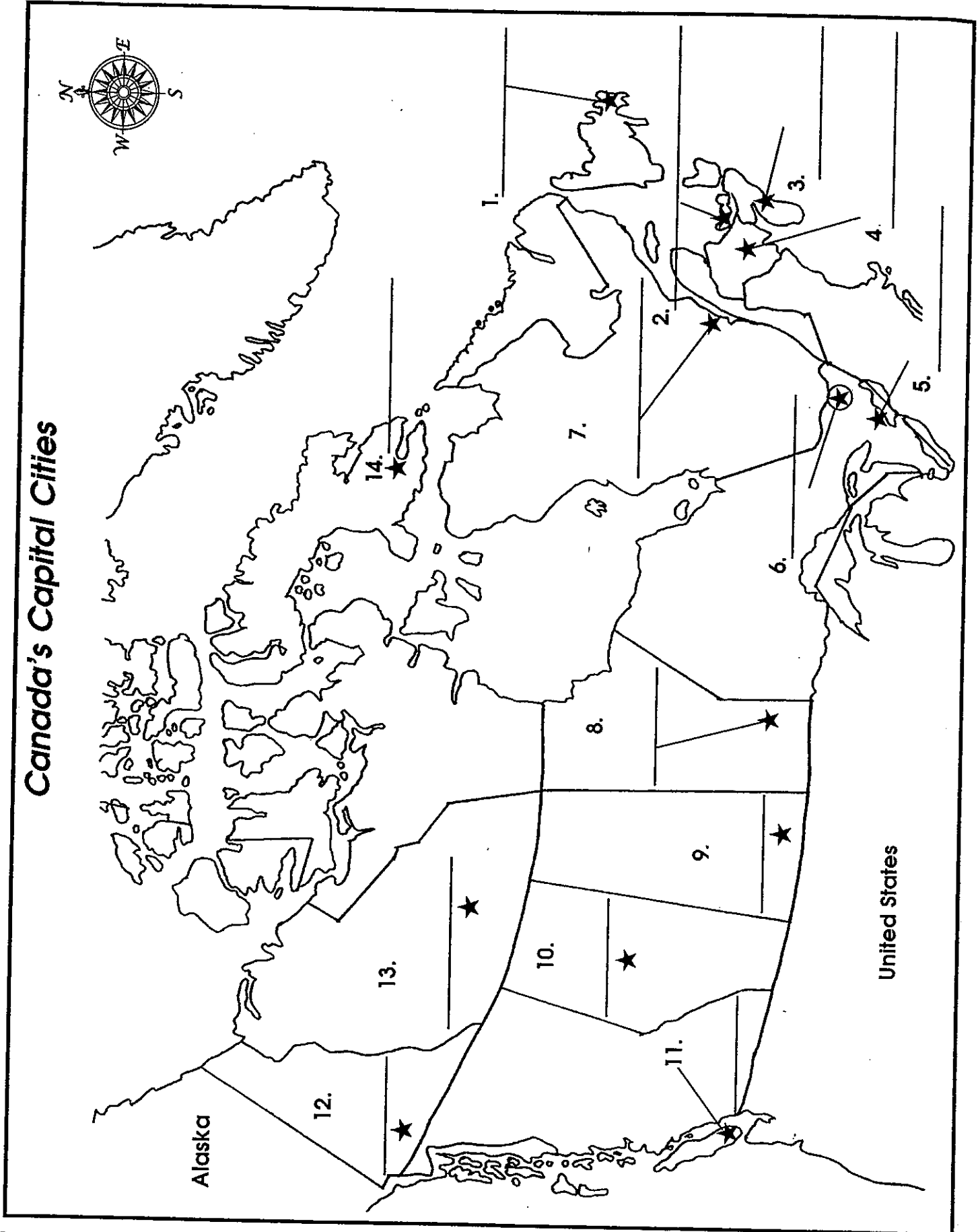
1. Canada has _____ provinces and three _____.
2. The names of Canada's provinces and territories are listed on the flag. Can you write their names in the correct alphabetical order.



3. Which province is an island? _____
4. Write the names of the Atlantic Provinces.

5. Write the names of the Prairie Provinces.

6. Write the names of the territories.




WORD SEARCH



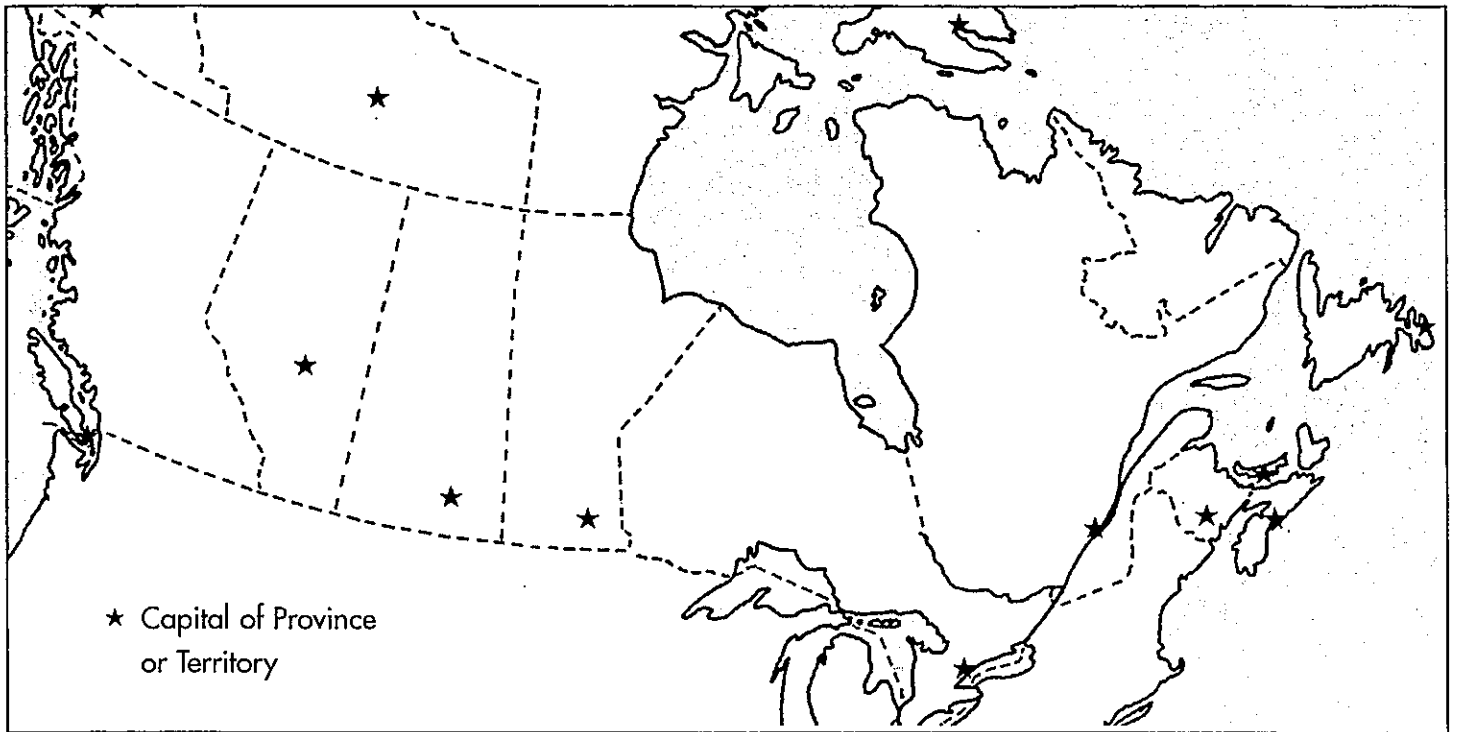
Search for Each Province/Territory and its Capital City

In the Word Search look for the names of all the provinces and territories found in Canada. Circle each one green.
Look for the names of all the capital cities too. Circle each one red.

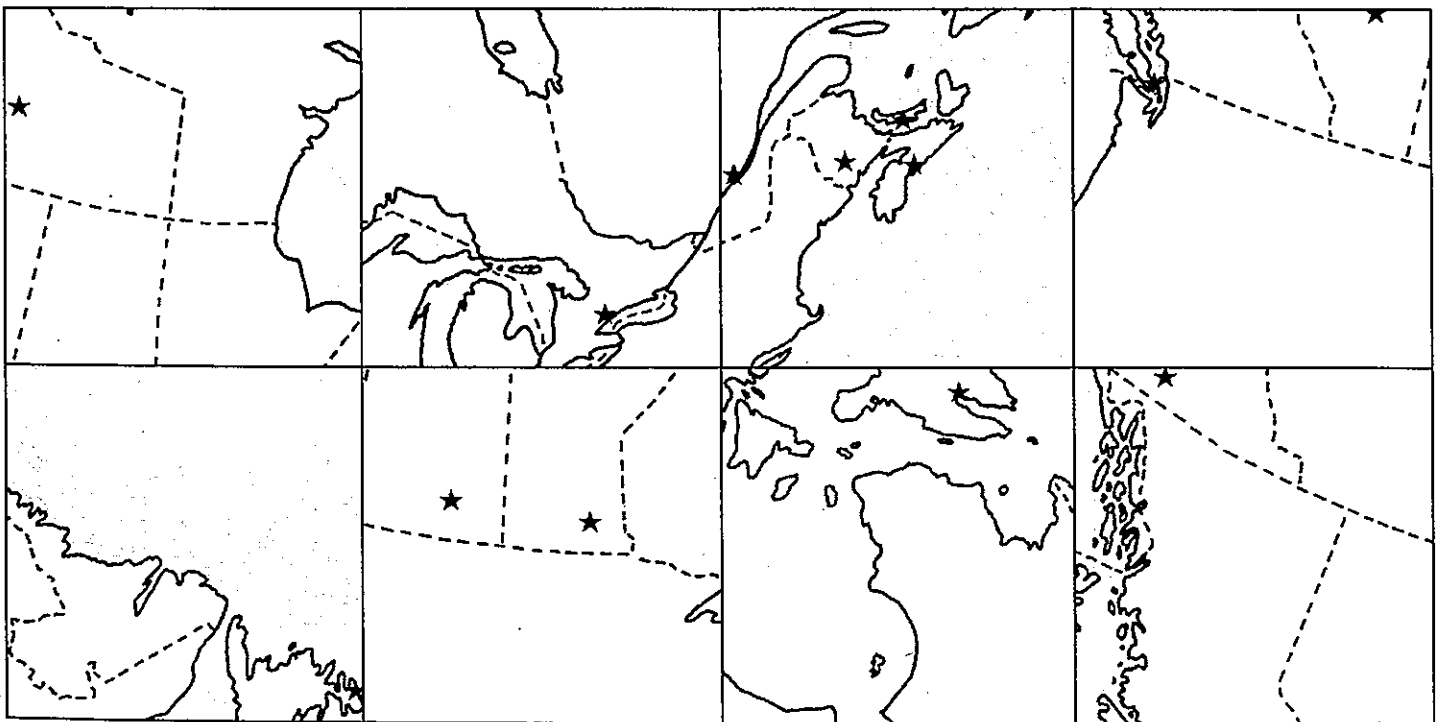


T	M	K	Q	U	E	B	E	C	C	I	T	Y	T	U	V	A	N	U	N	P	O
E	A	D	S	B	U	W	I	B	J	O	I	F	S	N	G	A	I	N	O	M	A
V	N	R	A	Q	H	C	O	N	T	A	R	I	O	Z	F	H	B	L	V	C	I
F	I	Q	A	L	I	U	T	G	T	J	R	Q	E	P	X	E	K	D	A	J	R
X	T	G	L	P	Z	L	T	V	H	C	T	O	R	O	N	T	O	V	S	U	O
N	O	O	B	Y	M	A	A	K	U	L	D	W	Y	M	Q	W	A	T	C	Y	T
C	B	S	E	F	W	G	W	H	I	T	E	H	O	R	S	E	X	B	O	Z	C
T	A	Q	R	P	O	V	A	A	I	B	M	Y	N	F	S	G	R	C	T	I	I
R	D	U	T	E	H	K	J	N	X	L	N	M	Z	H	L	E	K	J	I	D	V
H	C	H	A	R	L	O	T	T	E	T	O	W	N	A	R	W	L	Y	A	P	S
I	G	F	V	E	U	J	T	K	D	S	R	L	E	O	B	X	P	Z	Q	M	Q
P	Y	U	K	O	N	D	X	F	B	Z	T	A	W	I	N	N	I	P	E	G	R
O	E	U	Q	T	A	W	E	C	Y	H	H	I	F	O	Y	E	N	A	A	N	E
S	L	V	Q	V	W	U	G	V	T	J	W	K	O	L	O	W	M	G	N	F	D
R	L	P	K	R	E	U	J	H	W	I	E	X	U	Z	D	B	C	B	I	E	M
W	O	S	T	N	H	R	P	L	M	I	S	Q	N	E	B	R	Y	W	G	Z	O
Z	W	I	S	B	C	O	E	N	H	H	T	I	D	V	Q	U	E	B	E	C	N
D	K	A	L	H	T	X	Q	O	N	G	T	G	L	F	J	N	C	A	R	X	T
F	N	M	J	Y	A	G	C	T	O	T	E	U	A	K	L	S	M	D	U	B	O
X	I	T	M	V	K	Y	R	C	F	D	R	Q	N	K	Z	W	T	Y	N	X	N
U	F	K	Z	L	S	A	N	I	S	R	R	J	D	S	D	I	O	A	C	V	W
Q	E	R	A	O	A	D	M	R	N	P	I	R	T	Z	G	C	F	H	M	I	N
X	Y	S	B	C	S	E	E	E	N	O	T	K	P	W	X	K	Q	P	J	O	R
W	C	Z	B	B	C	F	L	D	P	E	O	U	S	F	A	K	K	G	G	S	M
W	W	X	T	D	G	K	D	E	H	Q	R	I	V	Y	J	I	L	J	L	H	T
V	Y	D	U	A	F	H	B	R	I	T	I	S	H	C	O	L	U	M	B	I	A
B	U	E	C	I	E	G	S	F	U	B	E	E	C	D	D	F	W	N	I	N	C
K	M	Z	S	Q	J	R	R	V	L	A	S	Q	P	V	E	O	G	H	X	J	O
T	V	H	P	D	N	A	L	S	I	D	R	A	W	D	E	E	C	N	I	R	P
L	I	J	O	G	W	T	F	U	X	M	L	M	K	V	Z	R	U	Y	P	B	T
N	H	A	L	I	F	A	X	Z	X	Y	W	S	T	J	O	H	N	S	A	S	Q

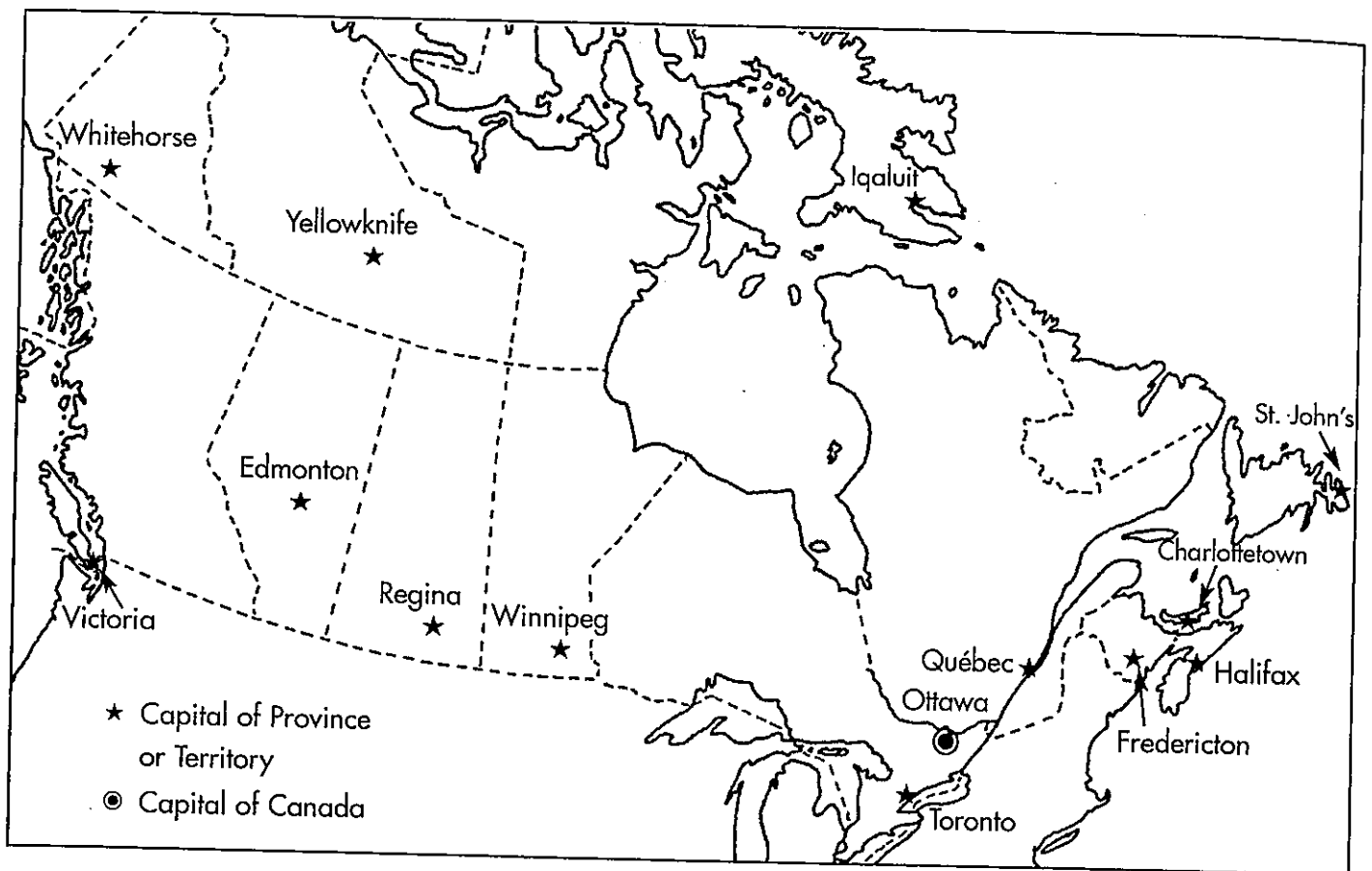
SHAPE AND SIZE OF THE PROVINCES



1. First, cut out the large rectangle below.
2. Cut along the 4 straight lines inside this rectangle. You will have 8 equal pieces.
3. Glue each piece in its correct place on the above map.
4. Colour the province (or territory) where you live. It is _____.



CAPITAL SEARCH



The names of **9 capital cities** are hidden in the puzzle below.
 Find and circle each name. Use the above map for help.

C	R	O	M	E	V	Q	U	E	B	E	C
H	U	R	E	S	I	U	B	D	O	U	H
A	L	T	E	R	C	A	R	M	E	S	R
L	E	H	V	A	T	O	R	O	N	T	O
I	Y	E	L	L	O	W	K	N	I	F	E
F	R	E	D	E	R	I	C	T	O	N	D
A	I	R	E	G	I	N	A	O	T	I	U
X	T	O	T	T	A	W	A	N	H	R	S